

TODAY'S NUMERAL

25

Write in standard form.

Produced by www.prodivame.com

Expanded Notation

$$20 + 5$$

Show the expanded form of the number as the sum of each place value.

Word Form

twenty five

Write the number in words.

Place Value

HTh TTh Th H T O Tth Hth

25


Show the value of the digit in its place.

Tally Marks

|||| |||| |||| |||| ||||


Show the number in tally marks..

Base Ten Model



Draw the model to show the number value using shorts, longs, flats and blocks.

Coins



Draw the model to show the number value in coins using one cent, ten cent, fifty cent and one dollar coins.

Roman Numerals

XXV

Write the number in Roman numerals using I=1, V=5, X=10, C=100, D=500, M=1000

Number Connection

- This is our school's address.
 - $100 \div 4 = 25$ "Hey! 25 is a quarter of 100 so that is why it is called a quarter in America."
- How does this number connect to you?

Addition or Subtraction Problem

Ms Hutchins had twenty children join her CCA but five more wanted to join. How many children in her CCA now?


Write an addition problem in words where the sum or total is this number.
OR Write a subtraction problem in words where the quotient is this number.

Multiplication and Division Equations

$$\begin{array}{l} 5 \times 5 = 25 \\ 25 \times 1 = 25 \\ 1 \times 25 = 25 \end{array} \quad \begin{array}{l} 25 \div 1 = 25 \\ 50 \div 2 = 25 \\ 100 \div 4 = 25 \end{array}$$

Write 3 multiplication equations where the product is this number.
AND Write 3 division equations where the quotient is this number..

Number Line



Show one of your operation problems from above on the number this number line.